

CUADERNILLO DE

restas






$$4 - 1 = 3$$




$$3 - 1 = \square$$



$$4 - 2 = \square$$




$$3 - 2 = \square$$




$$4 - 3 = \square$$




$$2 - 1 = \square$$




$$8 - 3 = \underline{\quad}$$




$$6 - 1 = \underline{\quad}$$



$$7 - 6 = \underline{\quad}$$



$$9 - 8 = \underline{\quad}$$




$$3 - 2 = \underline{\quad}$$



$$9 - 6 = \underline{\quad}$$

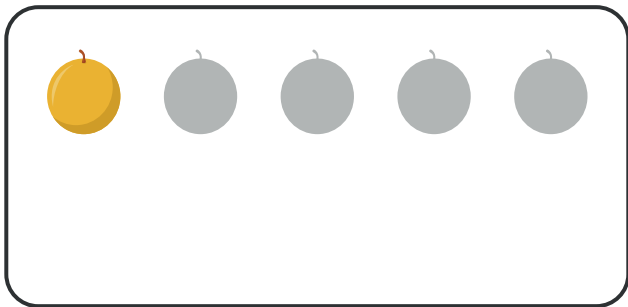




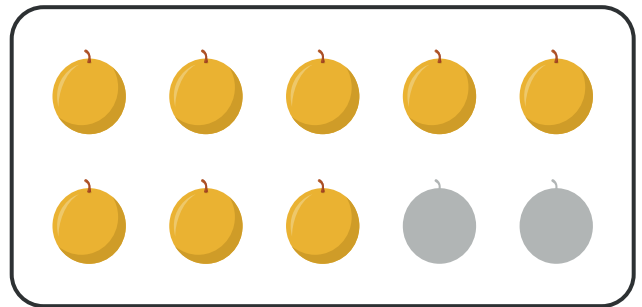
$$8 - 6 = \underline{\quad}$$



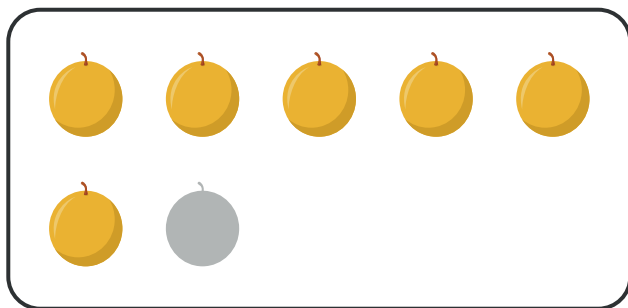
$$4 - 2 = \underline{\quad}$$



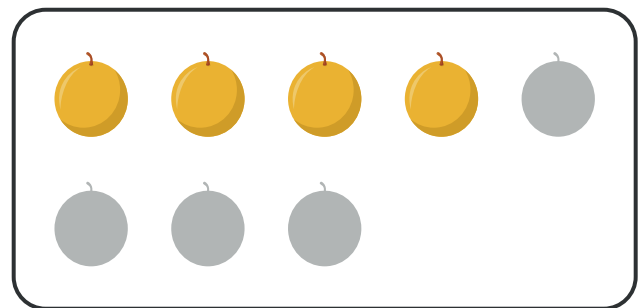
$$5 - 4 = \underline{\quad}$$




$$10 - 2 = \underline{\quad}$$




$$7 - 1 = \underline{\quad}$$




$$8 - 4 = \underline{\quad}$$



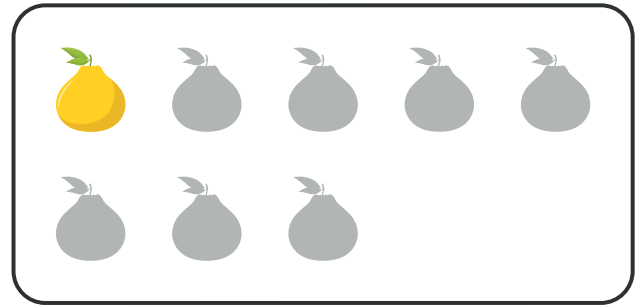
$$7 - 3 = \underline{\quad}$$



$$6 - 1 = \underline{\quad}$$



$$10 - 9 = \underline{\quad}$$




$$8 - 7 = \underline{\quad}$$




$$7 - 6 = \underline{\quad}$$




$$1 - 1 = \underline{\quad}$$




$$9 - 2 = \underline{\quad}$$




$$7 - 4 = \underline{\quad}$$




$$7 - 6 = \underline{\quad}$$




$$5 - 4 = \underline{\quad}$$




$$4 - 1 = \underline{\quad}$$



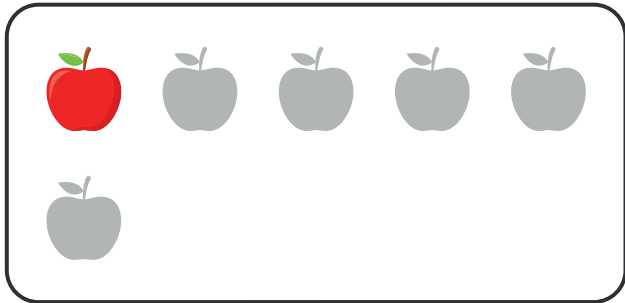
$$10 - 5 = \underline{\quad}$$




$$4 - 4 = \underline{\quad}$$




$$7 - 5 = \underline{\quad}$$




$$6 - 5 = \underline{\quad}$$




$$8 - 1 = \underline{\quad}$$




$$10 - 8 = \underline{\quad}$$




$$6 - 3 = \underline{\quad}$$




$$4 - 1 = \underline{\quad}$$




$$7 - 2 = \underline{\quad}$$




$$8 - 3 = \underline{\quad}$$



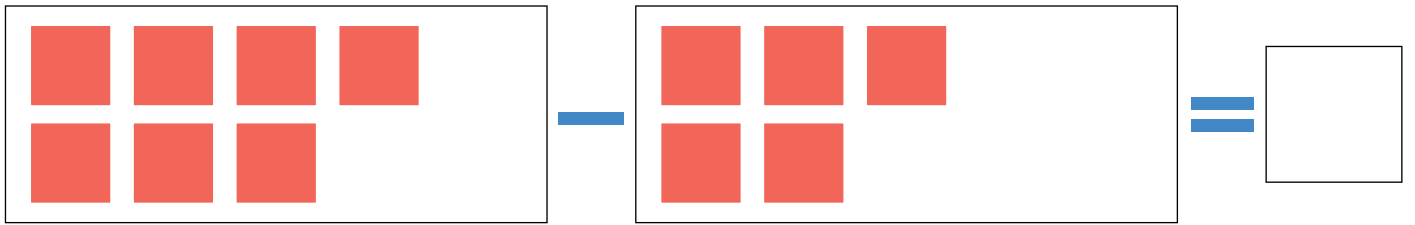
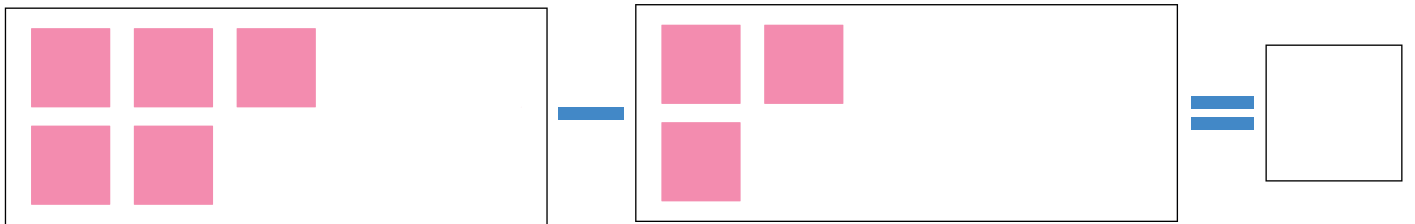
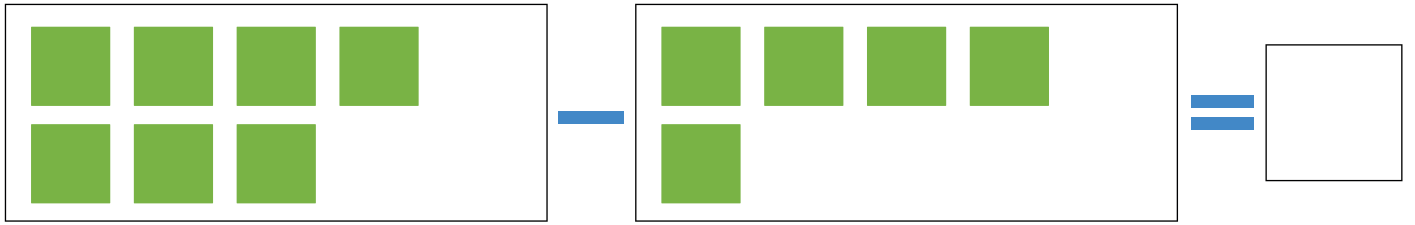
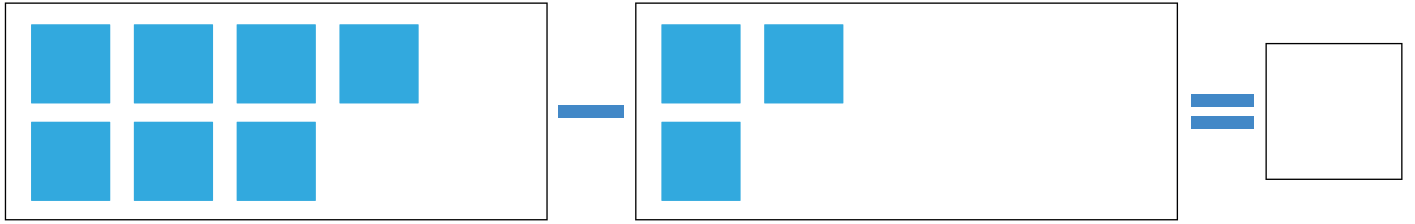
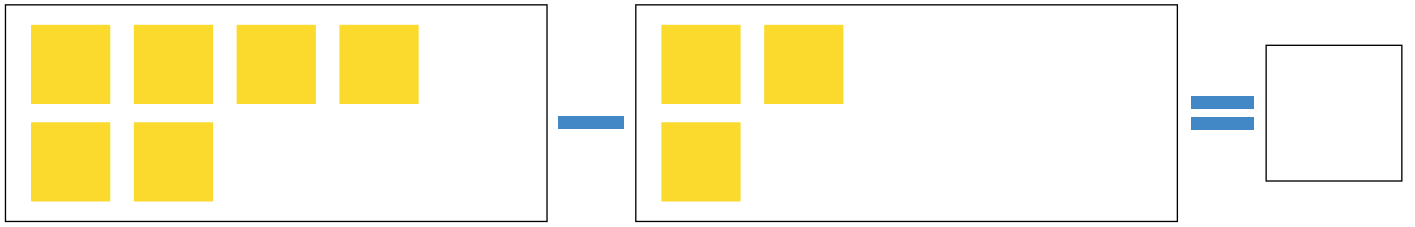
$$5 - 4 = \underline{\quad}$$

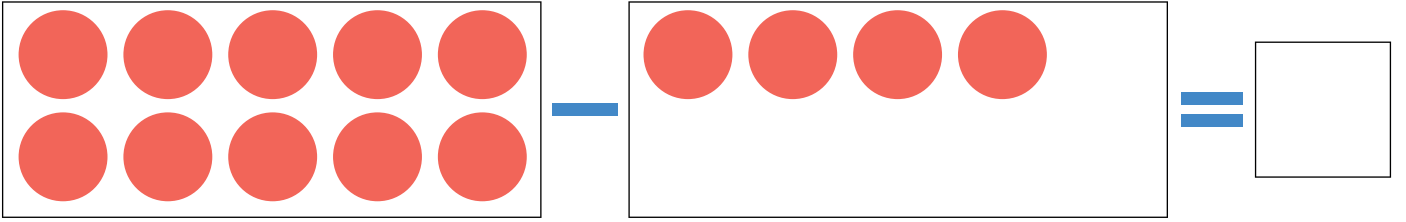
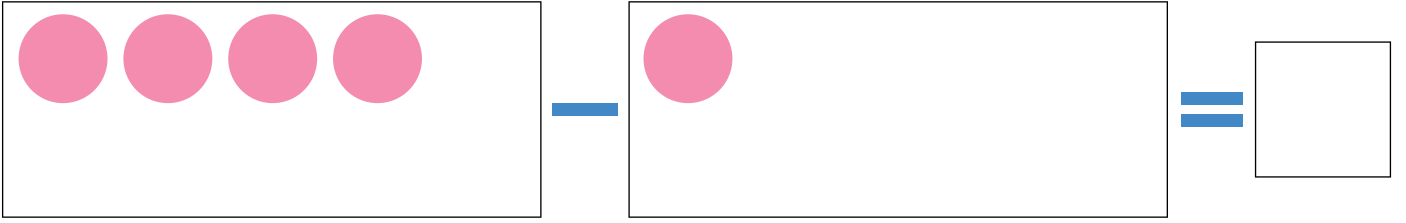
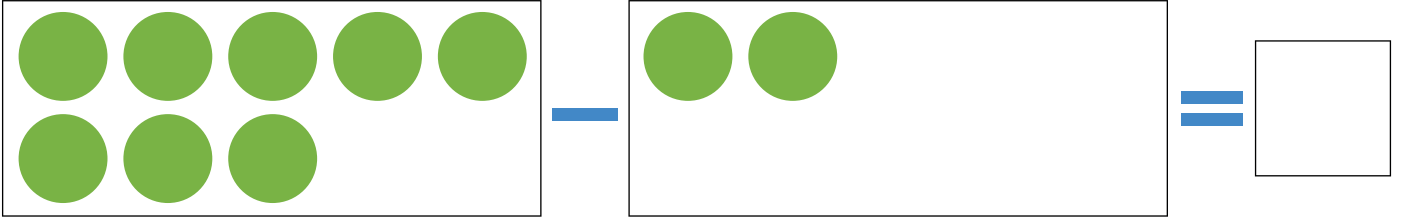
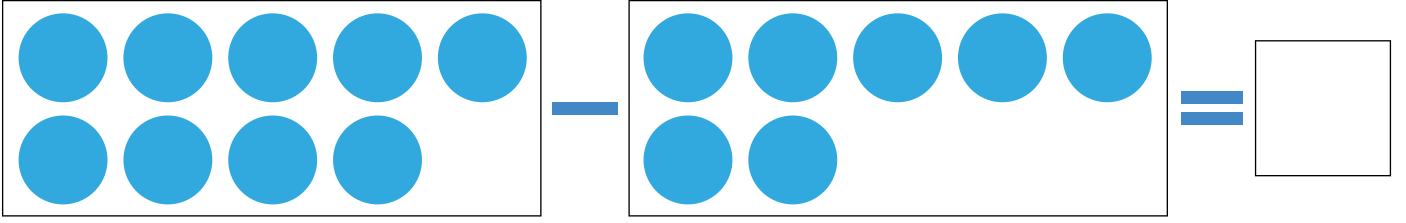
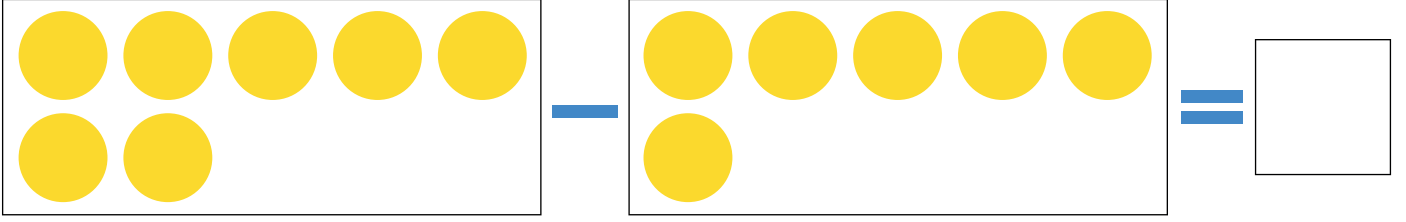


$$9 - 6 = \underline{\quad}$$



$$6 - 3 = \underline{\quad}$$





$$\square - 3 = 7$$

$$10 - \square = 5$$


$$5 - 3 = \square$$

$$8 - \square = 6$$

$$10 - 3 = \square$$

✂ 7 5 2 10 2 ✂







$$3 - 1 = 2$$



$$3 - 2 = ?$$




$$4 - 3 = ?$$




$$4 - 2 = ?$$




$$3 - 3 = ?$$




$$2 - 1 = ?$$




$$4 - 1 = 3$$




$$4 - 2 = ?$$




$$5 - 3 = ?$$



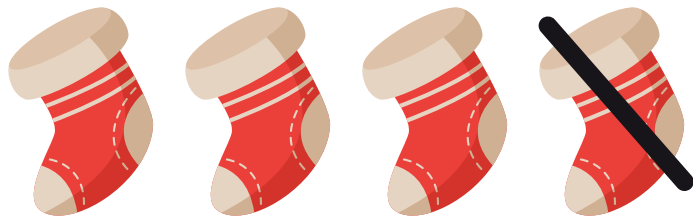
$$3 - 1 = ?$$



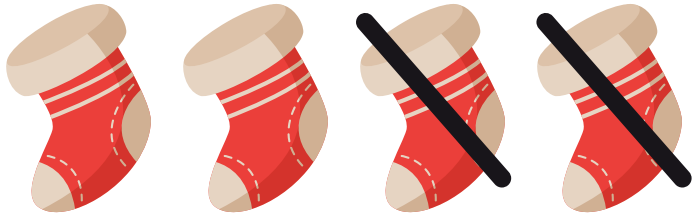
$$2 - 1 = ?$$



$$5 - 1 = ?$$




$$4 - 1 = 3$$



$$4 - 2 = ?$$




$$3 - 2 = ?$$



$$4 - 3 = ?$$



$$3 - 1 = ?$$



$$2 - 1 = ?$$

$$\text{Red Christmas Ornament} + \text{Cookie} + \text{Santa Hat} = \square$$

$$\text{Cookie} - \text{Yellow Star} - \text{Red Christmas Ornament} = \square$$

$$\text{Santa Hat} - \text{Red Christmas Ornament} + \text{Yellow Star} = \square$$

$$\text{Yellow Star} + \text{Santa Hat} - \text{Cookie} = \square$$

$$\text{Yellow Star} = 1 \quad \text{Red Christmas Ornament} = 4$$

$$\text{Cookie} = 6 \quad \text{Santa Hat} = 9$$

$$7 - 2 = \text{[tree with blank circle]}$$

$$4 - 1 = \text{[tree with blank circle]}$$

$$3 - 2 = \text{[tree with blank circle]}$$

$$7 - 4 = \text{[tree with blank circle]}$$





-



=



-



=



-



=



-



=






-




=



-




=



-




=



-



=




$$8 - 6 = \quad$$

$$4 - 3 = \quad$$


$$6 - 2 = \quad$$

$$8 - 4 = \quad$$







$$- 1 =$$







$$- 2 =$$




$$- 1 =$$




$$- 1 =$$







$$4 - 1$$




$$2 - 1$$



$$3 - 2$$




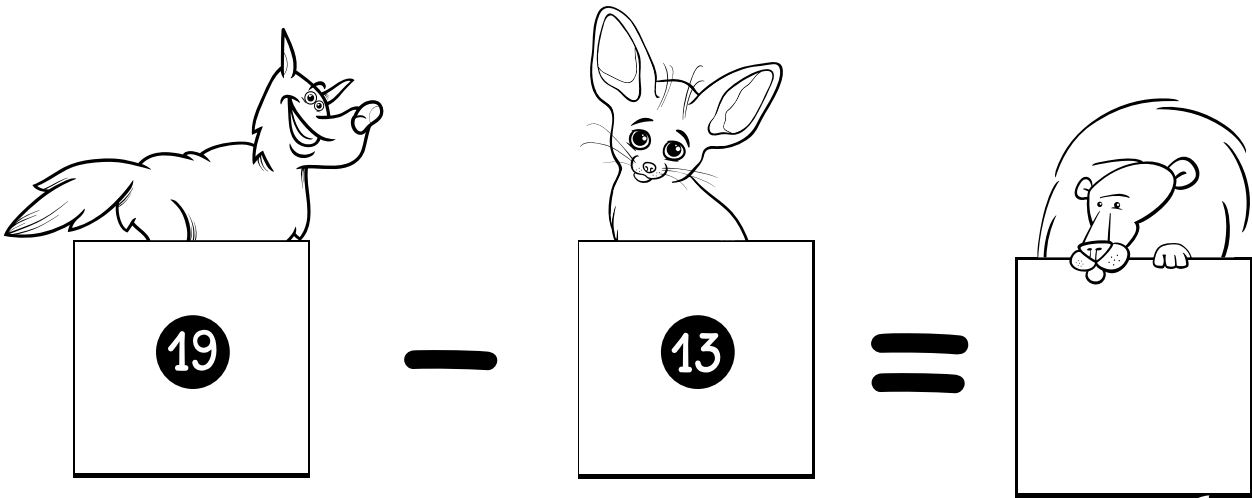
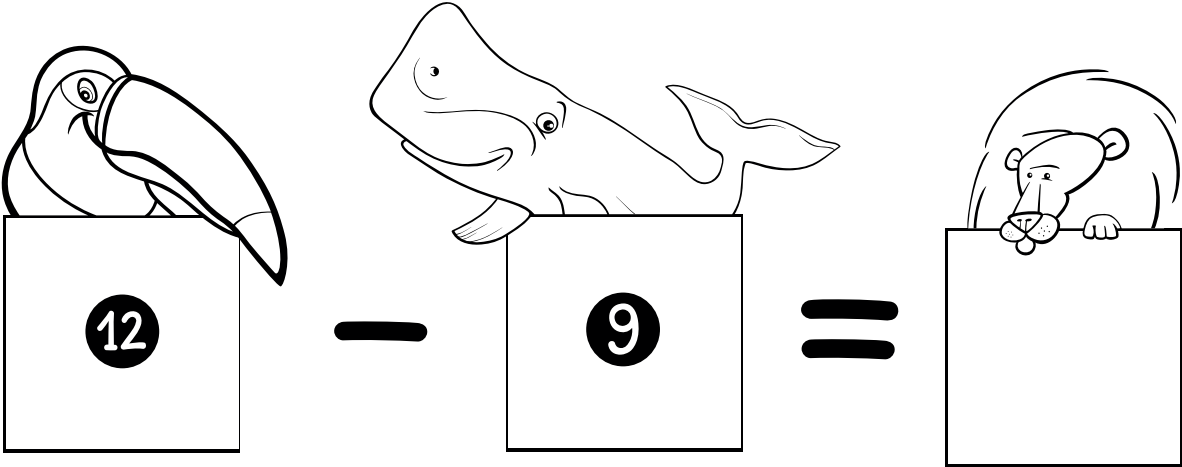
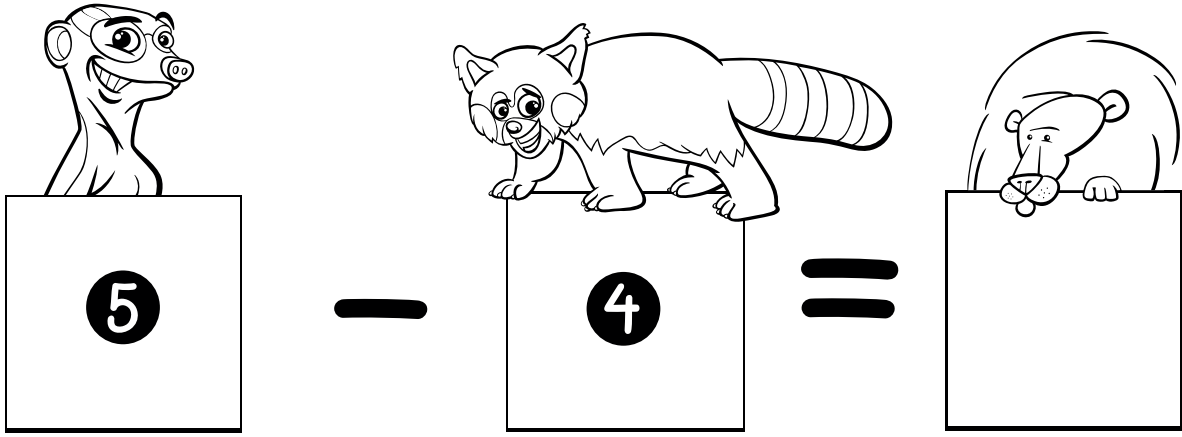
$$5 - 3$$















$$4 - 2$$

			2	-		=	2								
			+				+						-		
	5								-	1	=		8		
4	+		=	9			=					-			
	3		6				8				3	+		=	4
	=										=				+
		-	7	=			9	-		=					=
			-						+						
			2						1						
9	-		=	3					=						
-										-		=	0		
													-		
	=												4		
5	+		=	8									=		











-




.

.

4




-




.

.

1




-




.

.

6




-




.

.

4




-




.

.

2




-




.

.

8




-




.

.

3




-




.

.

8




-




.

.

2




-




.

.

2




-



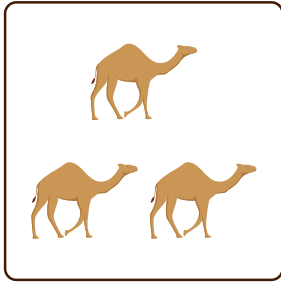
.

.

4



-




.

.

7



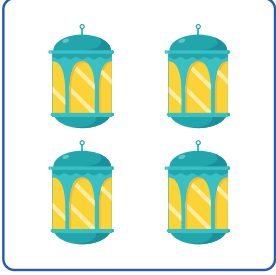



-

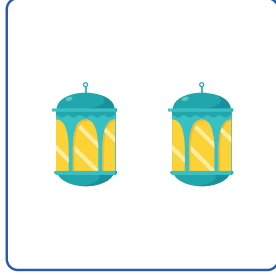


.

.




-

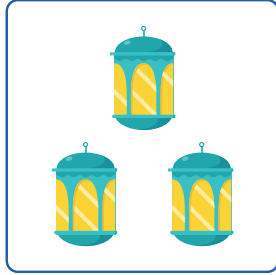


.

.

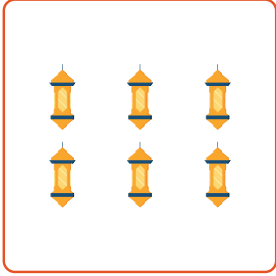


-

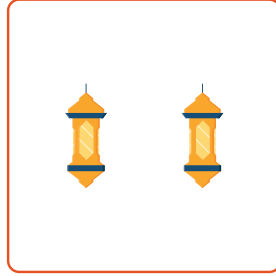


.

.

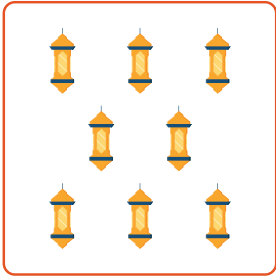


-

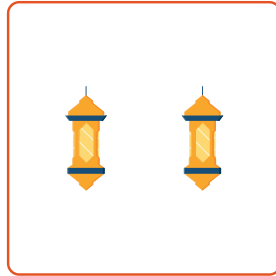


.

.

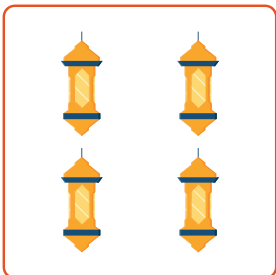


-




.

.



-







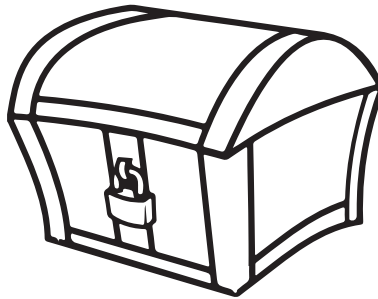







.

.




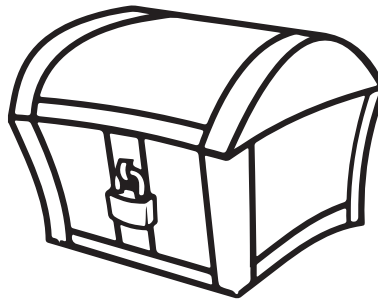








Los peces de las restas

Haz las operaciones en tu cuaderno, recorta los peces y pega cada resultado en el lugar correspondiente.




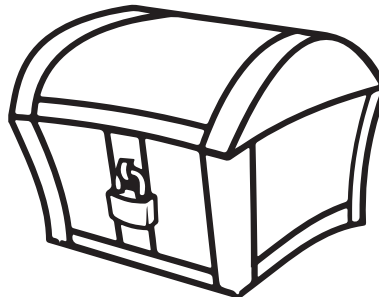






Los peces de las restas

Haz las operaciones en tu cuaderno, recorta los peces y pega cada resultado en el lugar correspondiente.







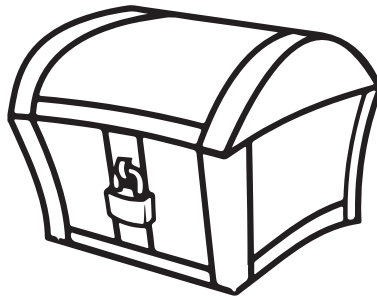









Los peces de las restas

Haz las operaciones en tu cuaderno, recorta los peces y pega cada resultado en el lugar correspondiente.






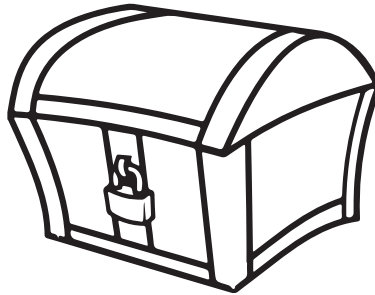








Los peces de las restas

Haz las operaciones en tu cuaderno, recorta los peces y pega cada resultado en el lugar correspondiente.



Los peces de las restas

Haz las operaciones en tu cuaderno, recorta los peces y pega cada resultado en el lugar correspondiente.





NOMBRE: _____

GRUPO: _____ FECHA: _____

Cuenta los focos y realiza las restas.



$$\boxed{5} - \boxed{1} = \boxed{4}$$



$$\boxed{} - \boxed{} = \boxed{}$$



$$\boxed{} - \boxed{} = \boxed{}$$



$$\boxed{} - \boxed{} = \boxed{}$$



$$\boxed{} - \boxed{} = \boxed{}$$



$$\boxed{} - \boxed{} = \boxed{}$$



NOMBRE: _____

GRUPO: _____ FECHA: _____

Dibuja los focos según corresponde y realiza las restas.



$$\boxed{4} - \boxed{2} = \boxed{2}$$

$$\boxed{6} - \boxed{1} = \boxed{}$$

$$\boxed{8} - \boxed{3} = \boxed{}$$

$$\boxed{9} - \boxed{2} = \boxed{}$$

$$\boxed{6} - \boxed{3} = \boxed{}$$


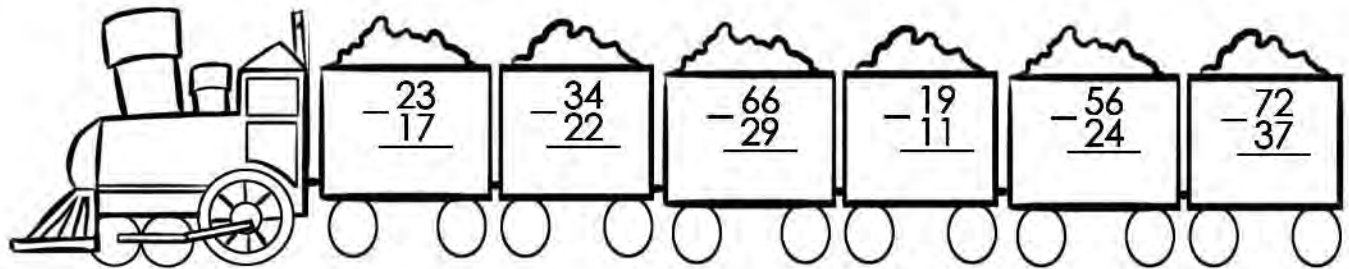
$$\boxed{5} - \boxed{1} = \boxed{}$$



NOMBRE: _____

GRUPO: _____ FECHA: _____

Realiza las restas y colorea los dibujos.






NOMBRE: _____

GRUPO: _____ FECHA: _____

Realiza las restas y colorea del color que corresponde.



Cafe 8

Amarrillo 10

Naranja 4

Rojo 6

NOMBRE: _____

GRUPO: _____ FECHA: _____



Escribe el número faltante en cada resta.

$$\boxed{4} - \boxed{} = \boxed{2}$$

$$\boxed{6} - \boxed{} = \boxed{5}$$

$$\boxed{9} - \boxed{} = \boxed{6}$$

$$\boxed{14} - \boxed{} = \boxed{8}$$

$$\boxed{12} - \boxed{} = \boxed{7}$$

$$\boxed{10} - \boxed{} = \boxed{6}$$

$$\boxed{} - \boxed{2} = \boxed{8}$$

$$\boxed{} - \boxed{4} = \boxed{8}$$

$$\boxed{} - \boxed{7} = \boxed{16}$$

$$\boxed{} - \boxed{5} = \boxed{13}$$

$$\boxed{9} - \boxed{} = \boxed{5}$$

$$\boxed{6} - \boxed{} = \boxed{2}$$

$$\boxed{17} - \boxed{5} = \boxed{}$$

$$\boxed{20} - \boxed{7} = \boxed{}$$

$$\boxed{} - \boxed{6} = \boxed{2}$$

$$\boxed{} - \boxed{3} = \boxed{12}$$

$$\boxed{13} - \boxed{9} = \boxed{}$$

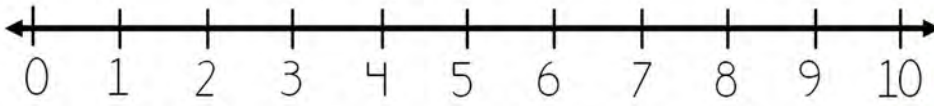
$$\boxed{15} - \boxed{8} = \boxed{}$$

$$\boxed{22} - \boxed{10} = \boxed{}$$

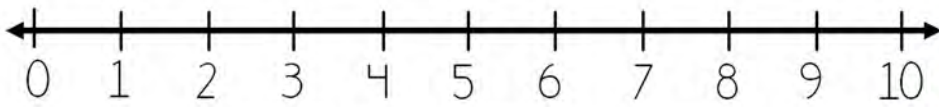
$$\boxed{25} - \boxed{16} = \boxed{}$$

A RESTAR Y A SALTAR

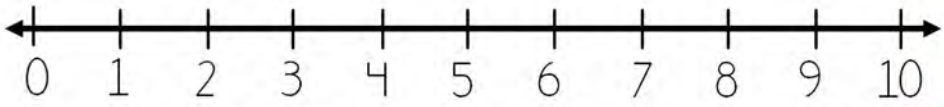
Realiza la operación y dibuja los saltos.



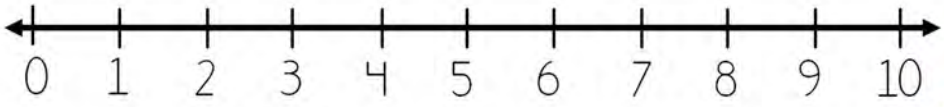
$$8 - 5 = \square$$



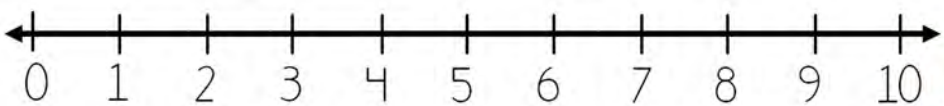
$$7 - 4 = \square$$



$$8 - 7 = \square$$



$$6 - 6 = \square$$

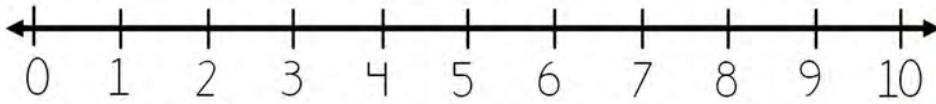


$$7 - 2 = \square$$

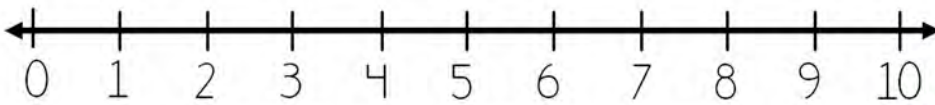


A RESTAR Y A SALTAR

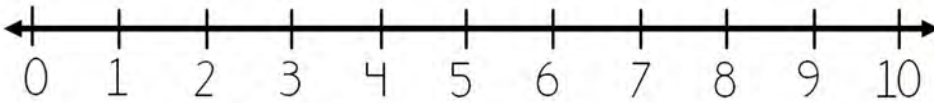
Realiza la operación y dibuja los saltos.



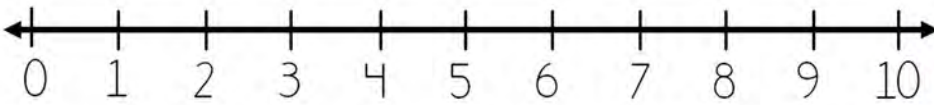
$$6 - 5 = \square$$



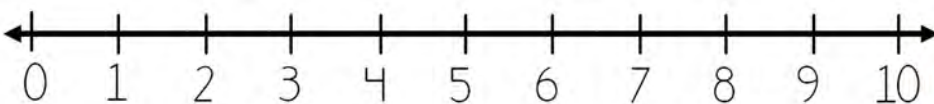
$$6 - 3 = \square$$



$$8 - 7 = \square$$



$$9 - 6 = \square$$

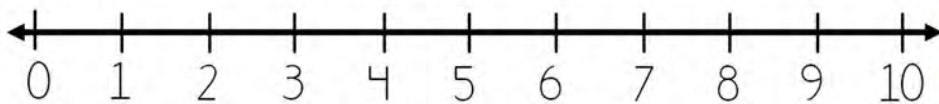


$$2 - 2 = \square$$



A RESTAR Y A SALTAR

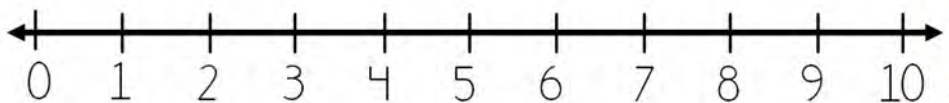
Realiza la operación y dibuja los saltos.



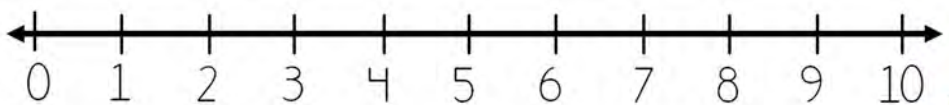
$$5 - 5 = \square$$



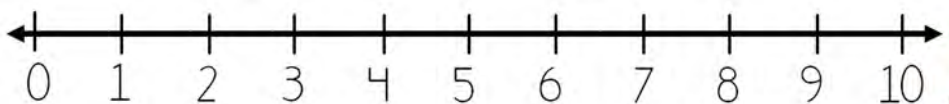
$$6 - 4 = \square$$



$$9 - 7 = \square$$



$$6 - 6 = \square$$

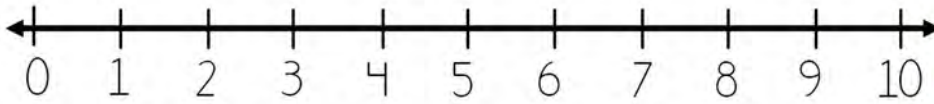


$$4 - 2 = \square$$

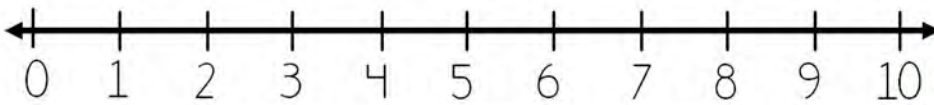


A RESTAR Y A SALTAR

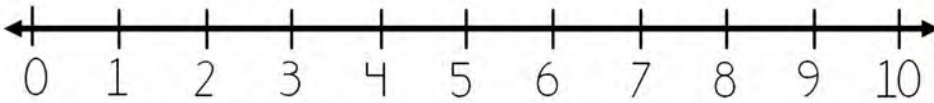
Realiza la operación y dibuja los saltos.



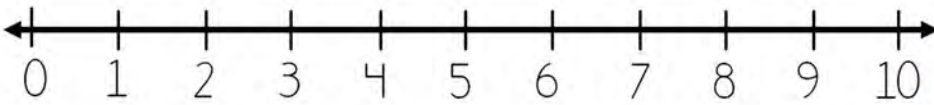
$$9 - 1 = \square$$



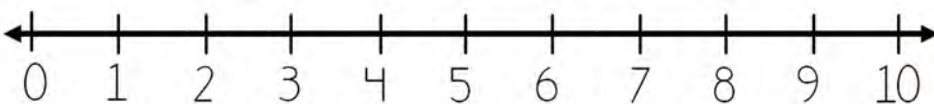
$$5 - 2 = \square$$



$$8 - 6 = \square$$



$$9 - 6 = \square$$

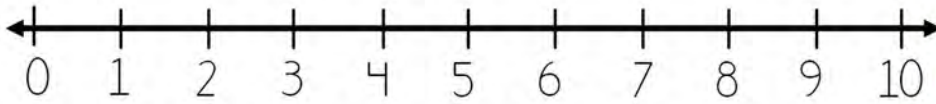


$$8 - 7 = \square$$



A RESTAR Y A SALTAR

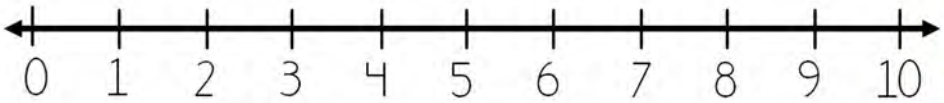
Realiza la operación y dibuja los saltos.



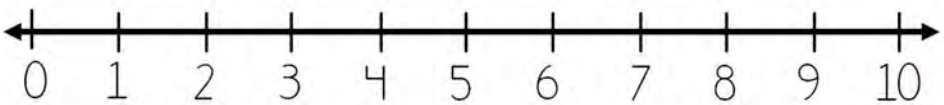
$$7 - 4 = \square$$



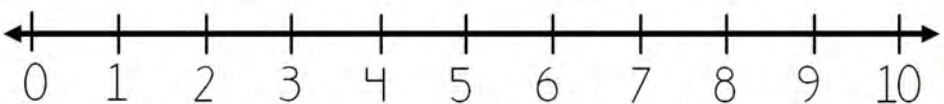
$$8 - 4 = \square$$



$$7 - 7 = \square$$



$$4 - 1 = \square$$

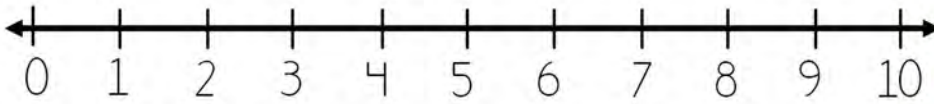


$$8 - 1 = \square$$



A RESTAR Y A SALTAR

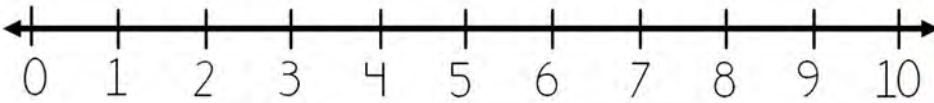
Realiza la operación y dibuja los saltos.



$$\boxed{2} - \boxed{1} = \boxed{}$$



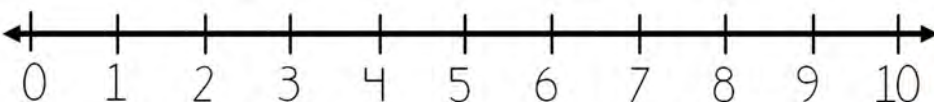
$$\boxed{9} - \boxed{4} = \boxed{}$$



$$\boxed{7} - \boxed{2} = \boxed{}$$



$$\boxed{6} - \boxed{5} = \boxed{}$$

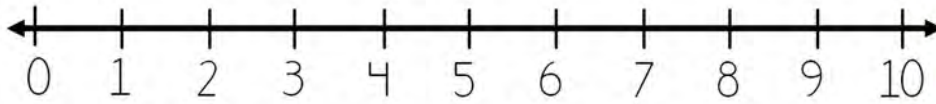


$$\boxed{3} - \boxed{2} = \boxed{}$$



A RESTAR Y A SALTAR

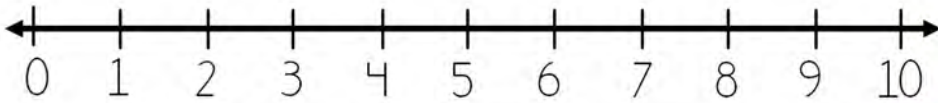
Realiza la operación y dibuja los saltos.



$$9 - 2 = \square$$



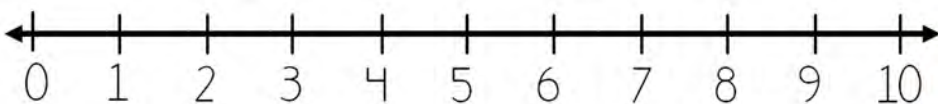
$$5 - 1 = \square$$



$$6 - 2 = \square$$



$$7 - 6 = \square$$

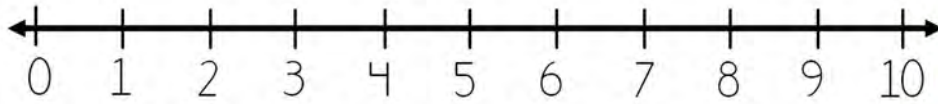


$$4 - 2 = \square$$



A RESTAR Y A SALTAR

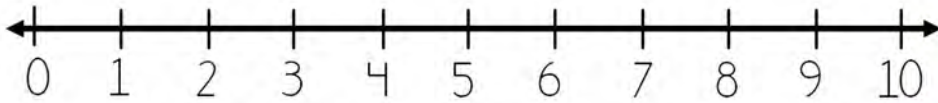
Realiza la operación y dibuja los saltos.



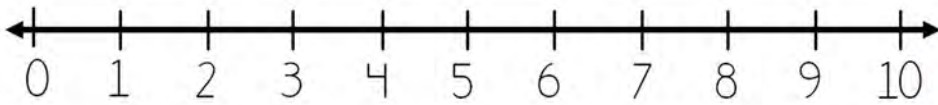
$$6 - 2 = \square$$



$$4 - 2 = \square$$



$$8 - 3 = \square$$



$$2 - 1 = \square$$



$$6 - 3 = \square$$



RESTAS

EL NÚMERO FALTANTE



$$65 - \bigcirc = 45$$

$$48 - \bigcirc = 34$$

$$41 - \bigcirc = 25$$

$$66 - \bigcirc = 56$$

$$51 - \bigcirc = 46$$

$$62 - \bigcirc = 29$$

$$48 - \bigcirc = 37$$

RESTAS

EL NÚMERO FALTANTE



$$45 - \bigcirc = 22$$

$$77 - \bigcirc = 44$$

$$83 - \bigcirc = 66$$

$$69 - \bigcirc = 22$$

$$89 - \bigcirc = 66$$

$$73 - \bigcirc = 55$$

$$44 - \bigcirc = 36$$

RESTAS

EL NÚMERO FALTANTE



$$47 - \bigcirc = 30$$

$$55 - \bigcirc = 42$$

$$65 - \bigcirc = 47$$

$$67 - \bigcirc = 27$$

$$42 - \bigcirc = 36$$

$$72 - \bigcirc = 49$$

$$51 - \bigcirc = 31$$

RESTAS

EL NÚMERO FALTANTE



$$32 - \bigcirc = 21$$

$$45 - \bigcirc = 28$$

$$31 - \bigcirc = 27$$

$$24 - \bigcirc = 18$$

$$27 - \bigcirc = 19$$

$$36 - \bigcirc = 25$$

$$33 - \bigcirc = 17$$

RESTAS

EL NÚMERO FALTANTE



$$20 - \bigcirc = 13$$

$$24 - \bigcirc = 18$$

$$15 - \bigcirc = 12$$

$$21 - \bigcirc = 15$$

$$27 - \bigcirc = 16$$

$$31 - \bigcirc = 20$$

$$19 - \bigcirc = 11$$

RESTAS

EL NÚMERO FALTANTE



$$9 - \text{○} = 5$$

$$10 - \text{○} = 4$$

$$12 - \text{○} = 8$$

$$15 - \text{○} = 9$$

$$20 - \text{○} = 10$$

$$13 - \text{○} = 7$$

$$9 - \text{○} = 2$$

RESTAS

EL NÚMERO FALTANTE



$$17 - \bigcirc = 11$$

$$14 - \bigcirc = 8$$

$$3 - \bigcirc = 3$$

$$17 - \bigcirc = 9$$

$$21 - \bigcirc = 12$$

$$12 - \bigcirc = 7$$

$$16 - \bigcirc = 5$$

RESTAS

EL NÚMERO FALTANTE



$$6 - \text{ } = 10$$

$$7 - \text{ } = 4$$

$$10 - \text{ } = 7$$

$$\text{ } - 2 = 6$$

$$\text{ } - 5 = 4$$

$$\text{ } - 6 = 12$$

$$\text{ } - 1 = 5$$

¡RESTA Y RECORTA!

Escribe el resultado en las operaciones, después recorta los resultados y pégalos donde corresponden.

-	36	12	15	22
50				
66				
72				

www.materialparamaestros.com




¡RESTA Y RECORTA!

Escribe el resultado en las operaciones, después recorta los resultados y pégalos donde corresponden.

-	33	22	45	30
95				
48				
73				

www.materialparamaestros.com




¡RESTA Y RECORTA!

Escribe el resultado en las operaciones, después recorta los resultados y pégalos donde corresponden.

-	110	185	144	202
225				
506				
320				

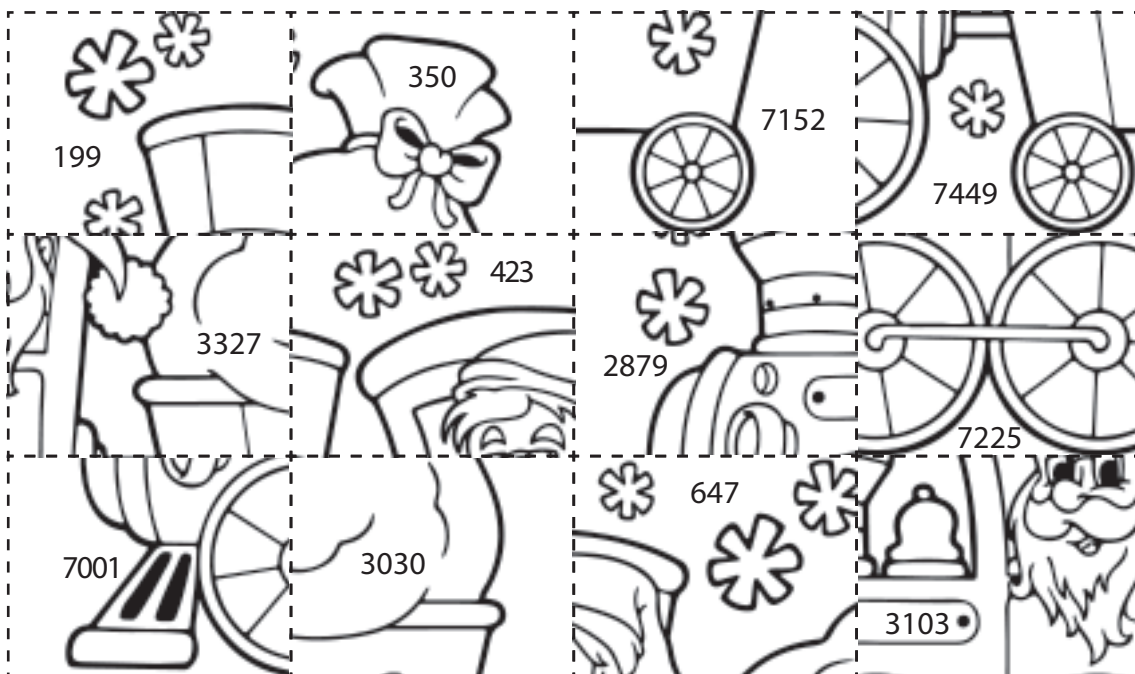
www.materialparamaestros.com



¡RESTA Y RECORTA!

Escribe el resultado en las operaciones, después recorta los resultados y pégalos donde corresponden.

—	901	677	453	750
1100				
3780				
7902				

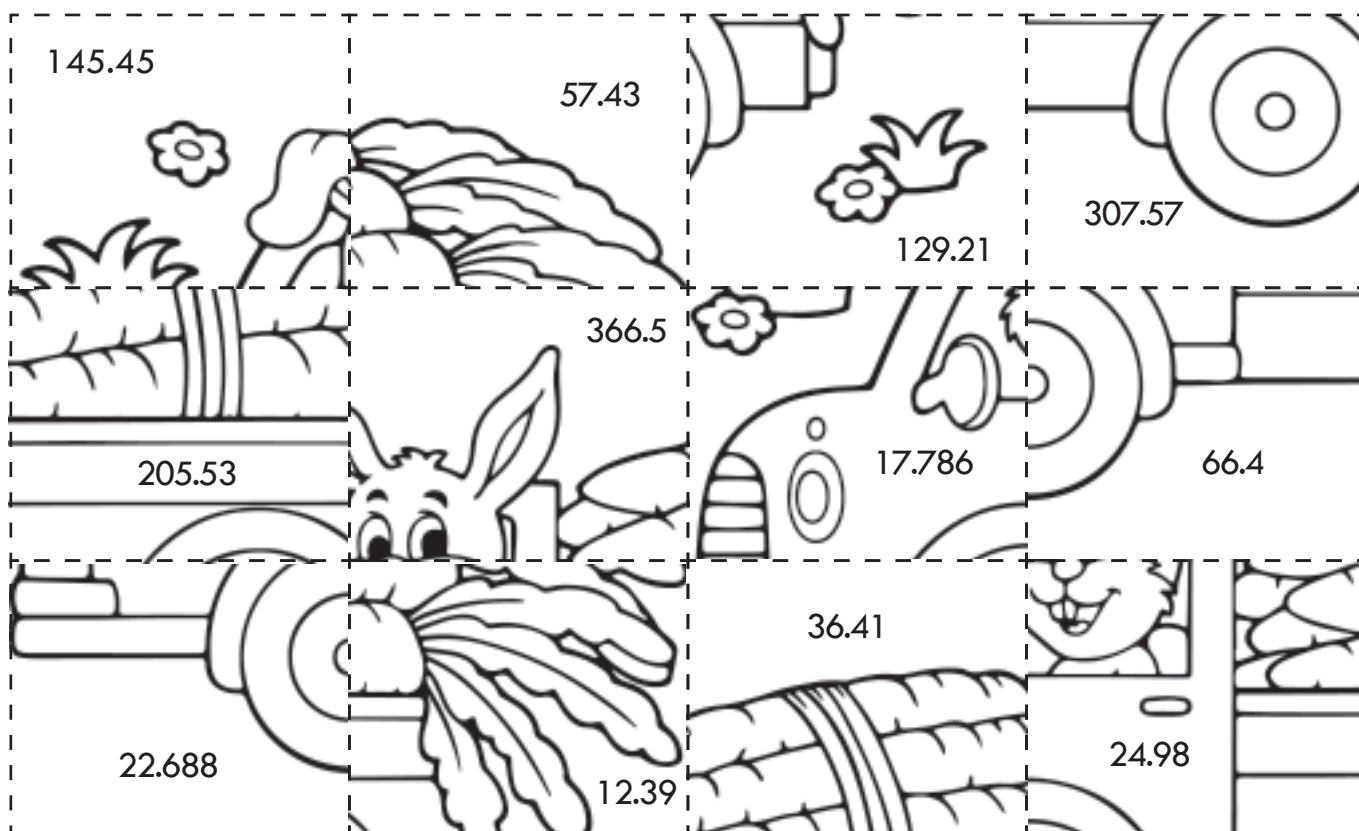


RESTAS



Resuelve las operaciones y pega en el lugar que corresponda la imagen con el resultado.

$\begin{array}{r} 232.6 \\ - 87.15 \\ \hline \end{array}$	$\begin{array}{r} 816.99 \\ - 450.49 \\ \hline \end{array}$	$\begin{array}{r} 62.10 \\ - 25.69 \\ \hline \end{array}$	$\begin{array}{r} 69.49 \\ - 12.06 \\ \hline \end{array}$
$\begin{array}{r} 72.806 \\ - 55.02 \\ \hline \end{array}$	$\begin{array}{r} 102.33 \\ - 77.35 \\ \hline \end{array}$	$\begin{array}{r} 609.65 \\ - 404.12 \\ \hline \end{array}$	$\begin{array}{r} 22.50 \\ - 10.11 \\ \hline \end{array}$
$\begin{array}{r} 86.44 \\ - 63.752 \\ \hline \end{array}$	$\begin{array}{r} 355.6 \\ - 289.2 \\ \hline \end{array}$	$\begin{array}{r} 808.22 \\ - 500.65 \\ \hline \end{array}$	$\begin{array}{r} 212.1 \\ - 82.89 \\ \hline \end{array}$















RESTAS



Resuelve las operaciones y pega en el lugar que corresponda la imagen con el resultado.

$\begin{array}{r} 35.25 \\ - 21.15 \\ \hline \end{array}$	$\begin{array}{r} 821.2 \\ - 645.6 \\ \hline \end{array}$	$\begin{array}{r} 66.22 \\ - 38.16 \\ \hline \end{array}$	$\begin{array}{r} 829.41 \\ - 381.10 \\ \hline \end{array}$
$\begin{array}{r} 645.7 \\ - 72.92 \\ \hline \end{array}$	$\begin{array}{r} 444.89 \\ - 245.99 \\ \hline \end{array}$	$\begin{array}{r} 666.66 \\ - 33.33 \\ \hline \end{array}$	$\begin{array}{r} 88.22 \\ - 44.66 \\ \hline \end{array}$
$\begin{array}{r} 69.23 \\ - 48.2 \\ \hline \end{array}$	$\begin{array}{r} 55.86 \\ - 32.44 \\ \hline \end{array}$	$\begin{array}{r} 808.2 \\ - 105.36 \\ \hline \end{array}$	$\begin{array}{r} 202 \\ - 105.36 \\ \hline \end{array}$

 14.1	 448.31	 96.64	 269.6
 633.33	 175.6	 572.78	 23.42
 21.03	 43.56	 28.06	 198.9

RESTAS



Resuelve las operaciones y pega en el lugar que corresponda la imagen con el resultado.

$\begin{array}{r} 806.69 \\ - 705.06 \\ \hline \end{array}$	$\begin{array}{r} 305.43 \\ - 232.9 \\ \hline \end{array}$	$\begin{array}{r} 405.102 \\ - 339.42 \\ \hline \end{array}$	$\begin{array}{r} 88.9 \\ - 47.2 \\ \hline \end{array}$
$\begin{array}{r} 902.92 \\ - 645.33 \\ \hline \end{array}$	$\begin{array}{r} 602.22 \\ - 499.49 \\ \hline \end{array}$	$\begin{array}{r} 891.6 \\ - 145.67 \\ \hline \end{array}$	$\begin{array}{r} 740.17 \\ - 501.48 \\ \hline \end{array}$
$\begin{array}{r} 62.5 \\ - 36.1 \\ \hline \end{array}$	$\begin{array}{r} 48.2 \\ - 27.6 \\ \hline \end{array}$	$\begin{array}{r} 112.9 \\ - 89.9 \\ \hline \end{array}$	$\begin{array}{r} 306.96 \\ - 48.16 \\ \hline \end{array}$

