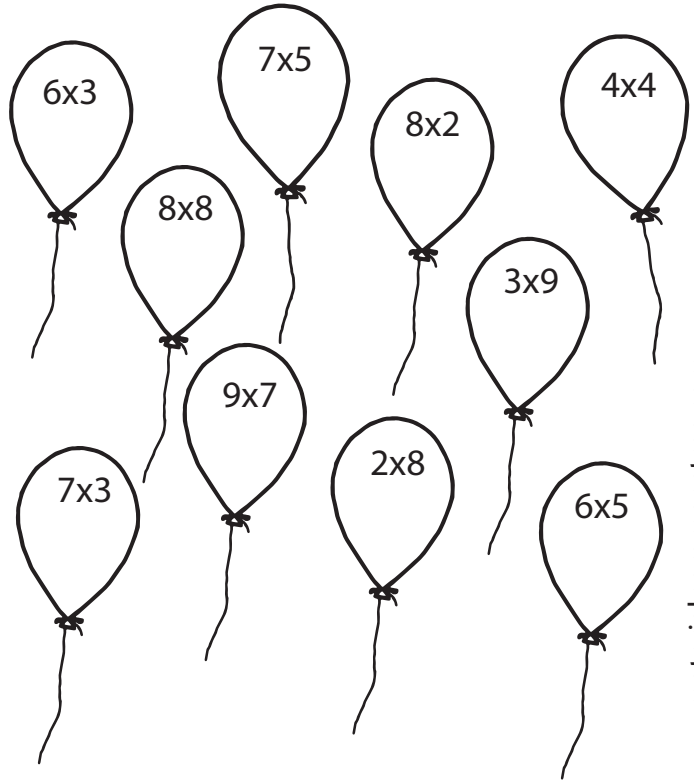


Une la multiplicación con su resultado.


$3 \times 4 =$	60
$5 \times 8 =$	20
$3 \times 6 =$	12
$6 \times 10 =$	27
$4 \times 5 =$	36
$9 \times 4 =$	40
$10 \times 7 =$	48
$5 \times 9 =$	45
$8 \times 6 =$	18
$9 \times 3 =$	70

Escribe el resultado de las multiplicaciones y colorea los globos.



©www.materialparamaestros.com

Colorea los helados que tengan resultados de la tabla del 7.



Completa las siguientes multiplicaciones.

- $3 \times 4 =$
- $5 \times 8 =$
- $3 \times 6 =$
- $6 \times 10 =$
- $4 \times 5 =$
- $9 \times 4 =$
- $10 \times 7 =$
- $5 \times 9 =$
- $8 \times 6 =$
- $9 \times 3 =$

Completa las siguientes multiplicaciones.

$5 \times 2 = \square$

$8 \times 1 = \square$

$9 \times 3 = \square$

$4 \times 10 = \square$

$8 \times 4 = \square$

$5 \times 9 = \square$

$10 \times 3 = \square$

$7 \times 7 = \square$

$6 \times 6 = \square$

$3 \times 3 = \square$

$2 \times 4 = \square$

$7 \times 5 = \square$

$4 \times 2 = \square$

$7 \times 10 = \square$

$2 \times 9 = \square$

$6 \times 9 = \square$


$10 \times 1 = \square$

$8 \times 8 = \square$

$6 \times 2 = \square$

$7 \times 6 = \square$

Colorea las flores que correspondan a los resultados de la tabla del 9.



Completa las siguientes multiplicaciones.

$2 \times \underline{\quad} = 8$

$\underline{\quad} \times 5 = 35$

$4 \times 2 = \underline{\quad}$

$\underline{\quad} \times 10 = 70$

$2 \times \underline{\quad} = 18$

$6 \times 9 = \underline{\quad}$

$10 \times \underline{\quad} = 10$

$\underline{\quad} \times 8 = 64$

$6 \times 2 = \underline{\quad}$

$\underline{\quad} \times 6 = 42$

Completa las siguientes multiplicaciones.

$7 \times 4 = \square$

$9 \times 6 = \square$

$8 \times 5 = \square$

$2 \times 2 = \square$

$3 \times 9 = \square$

$7 \times 9 = \square$

$8 \times 8 = \square$

$4 \times 5 = \square$

$8 \times 1 = \square$

$7 \times 6 = \square$

$5 \times 8 = \square$

$3 \times 3 = \square$

$8 \times 7 = \square$

$7 \times 3 = \square$

$5 \times 3 = \square$

$2 \times 6 = \square$

$10 \times 8 = \square$

$4 \times 8 = \square$

$9 \times 8 = \square$

$7 \times 1 = \square$

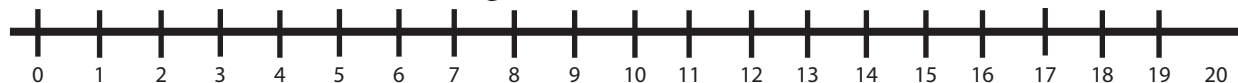


Colorea las flores que correspondan a los resultados de las tablas del 6 y 8.



Colorea los resultados de la tabla del 5 y 6.

5	9	10	2	8	6	4	3	7	1
44	46	49	50	43	42	45	48	47	41
25	28	30	21	29	22	27	24	23	26
36	32	35	39	37	38	31	33	34	40
18	15	11	16	12	20	19	13	17	14
51	60	54	56	52	55	58	59	57	53
99	92	95	97	96	93	98	94	100	91
71	79	73	75	77	76	72	74	80	78
90	82	84	86	88	81	87	83	89	85
66	68	62	64	70	61	63	67	65	69

Completa la siguiente serie con los resultados de la tabla del 2.



4



16

Colorea los corazones que tengan resultados de la tabla del 3.



Completa las siguientes multiplicaciones.

$5 \times 4 = \square$

$8 \times 8 = \square$

$3 \times 6 = \square$

$2 \times 10 = \square$

$7 \times 5 = \square$

$9 \times 4 = \square$

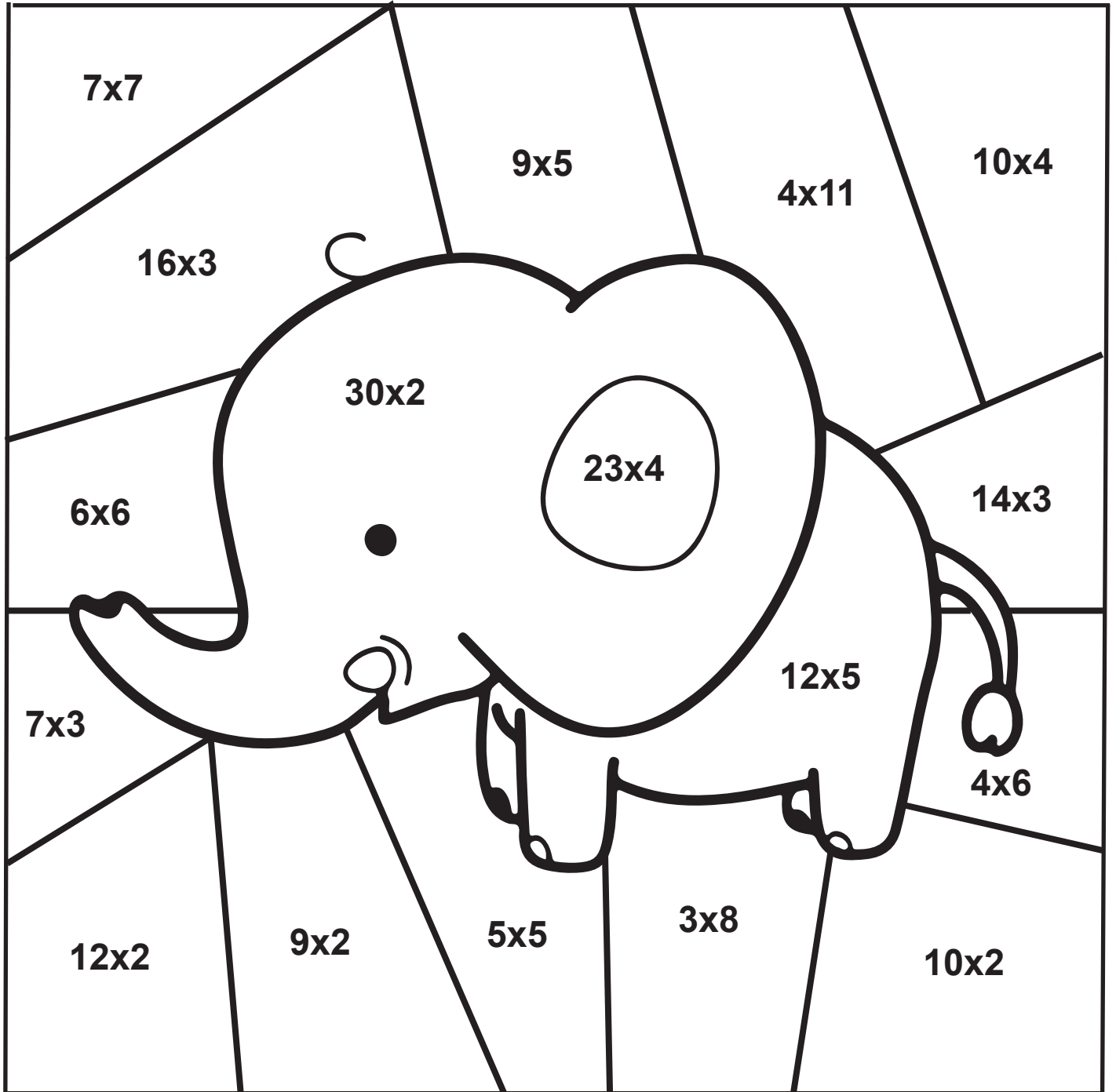
$10 \times 7 = \square$

$7 \times 9 = \square$

$2 \times 6 = \square$

$4 \times 3 = \square$

Realiza las multiplicaciones y colorea según el resultado.



©www.materialparamaestros.com

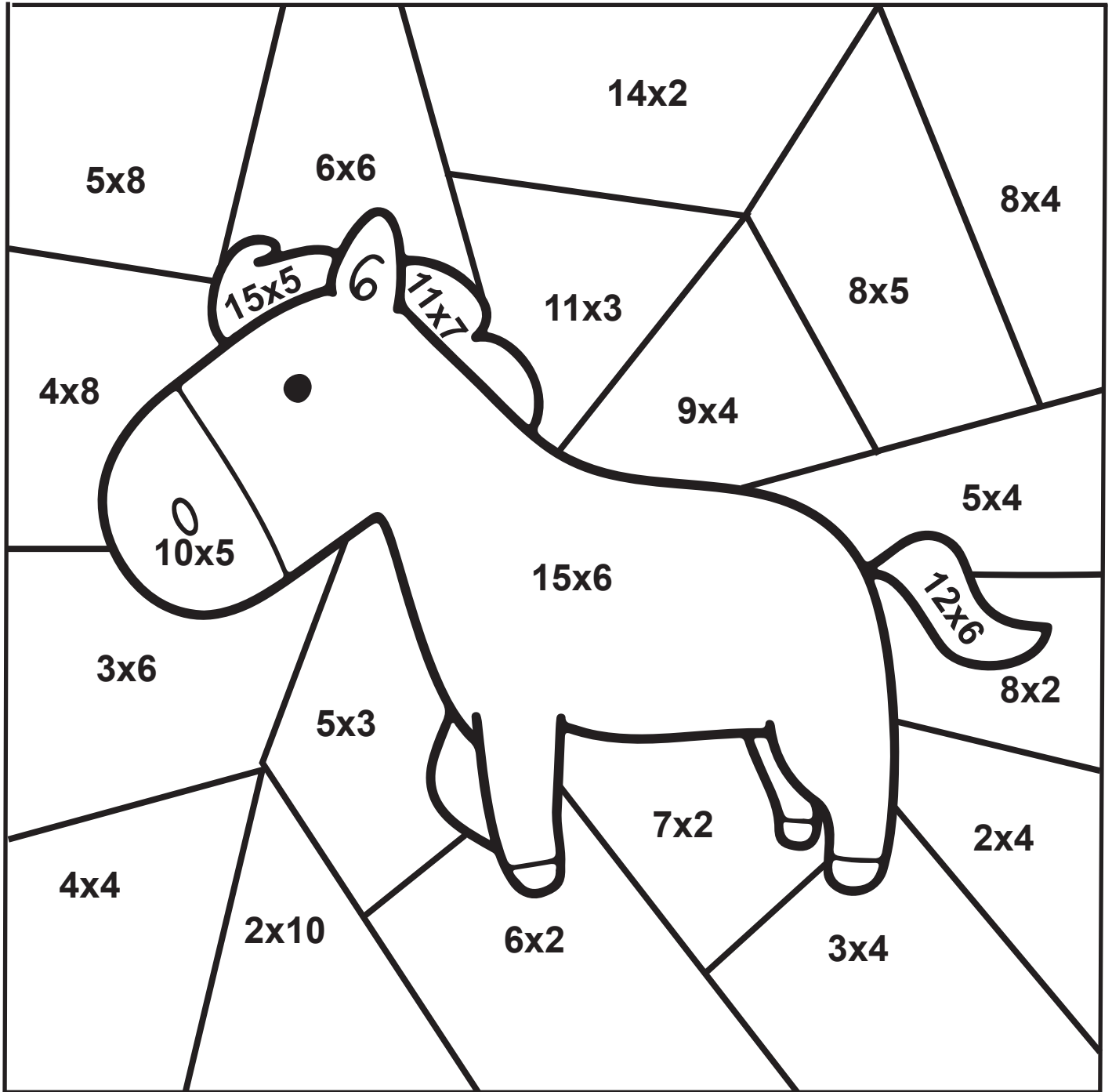
VERDE 01 hasta 25

GRIS 51 hasta 75

AZUL 26 hasta 50

ROSA 76 hasta 100

Realiza las multiplicaciones y colorea según el resultado.



©www.materialparamaestros.com

VERDE 01 hasta 20

AZUL 21 hasta 40

ROSA 41 hasta 60

NEGRO 61 hasta 80

CAFE 81 hasta 100

TABLAS DE MULTIPLICAR DEL 2 Y 3



2×9

3×5

2×4

3×1



2

4

6

8

2×10

3×2

3×4

2×5

10

12

14

16

2×7

3×8

2×3

3×3

18

20

3

6

3×10

2×8

3×7

2×2

9

12

15

18

2×6

2×1

3×6

3×9

21

24

27

30



TABLAS DE MULTIPLICAR DEL 4 Y 5



4×9

4×1

4×10

4

4×11

4×6

5×1

4×5

16

12

20

5×2

5×9

5×10

28

24

40

5×8

5×5

5×6

36

32

50

4×2

5×4

4×7

10

5

15

4×8

5×7

4×3

25

20

30

4×4

5×3

5×3

40

35

45

TABLAS DE MULTIPLICAR DEL 6 Y 7



www.materialparamaestros.com

7×1

6×5

7×9

6×4

7×8

6×8

7×3

6×1

7×10

7×7

7×2

7×4

6×9

6×10

6×2


6×6

6×3


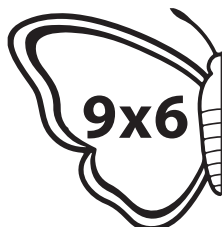
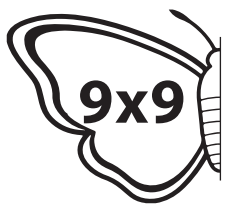
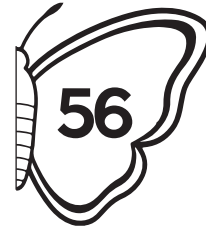
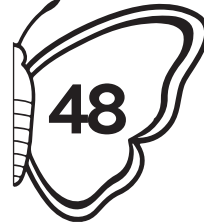
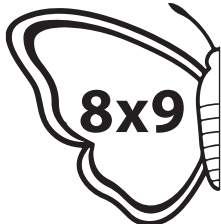
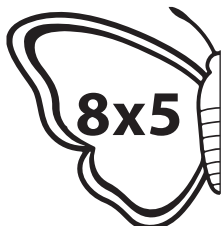
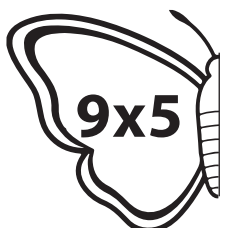
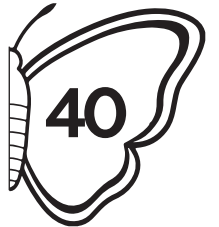
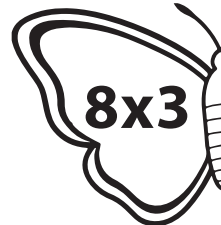
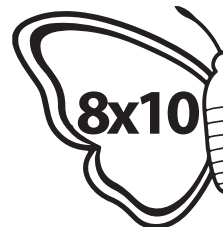
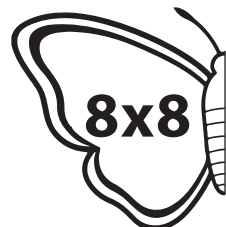
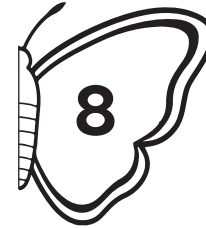

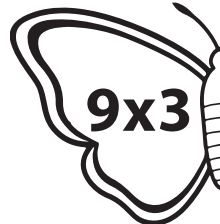
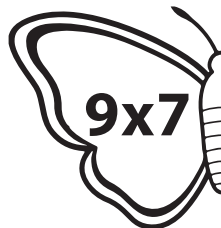
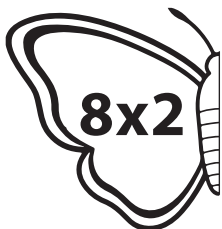

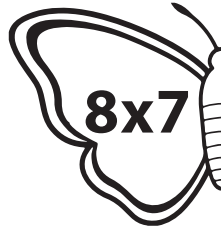
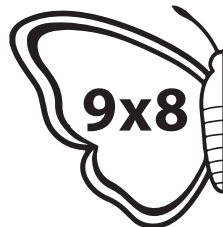
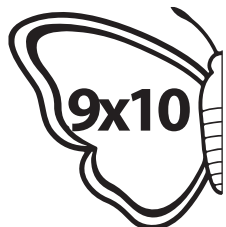
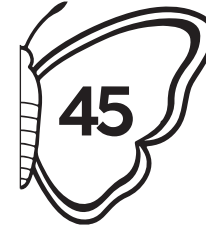
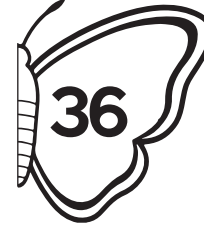
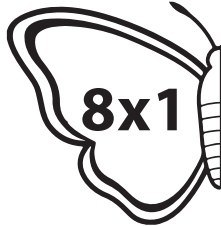
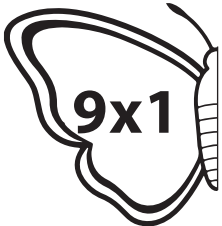

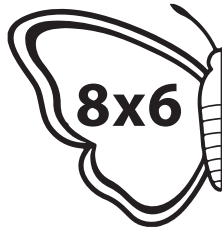
7×5

7×6




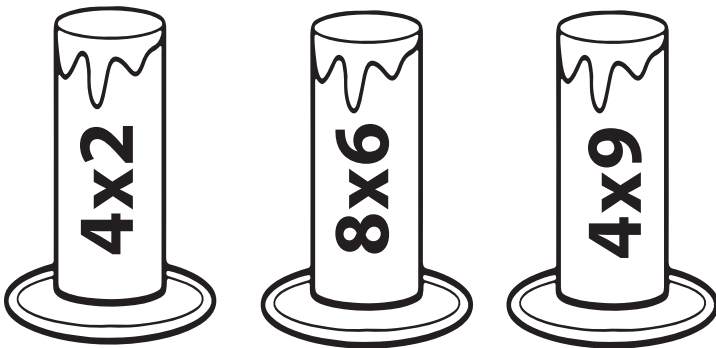



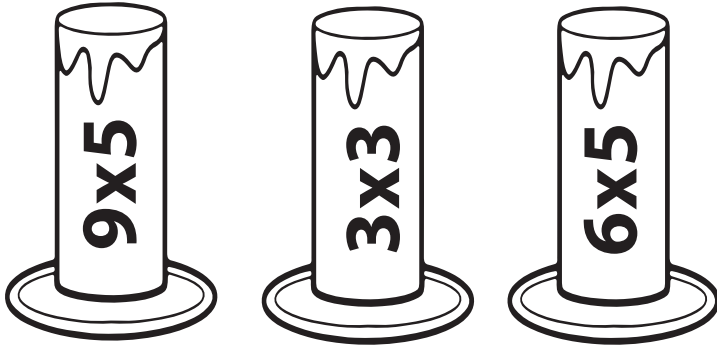
6×7



TABLAS DE MULTIPLICAR DEL 8 Y 9



TABLAS DE MULTIPLICAR



TABLAS DE MULTIPLICAR



4x4



7x3



10



64



8x8



9x8



21



24



5x8



6x7



18



40



3x6



2x5



42



16



8x3



7x7



72



49

Tabla del 2

Colorea las manzanas de los resultados de la tabla del 2.

Completa la tabla del 2.

$2 \times 1 = \square$

$2 \times 2 = \square$

$2 \times 3 = \square$

$2 \times 4 = \square$

$2 \times 5 = \square$



$2 \times 6 = \square$

$2 \times 7 = \square$

$2 \times 8 = \square$

$2 \times 9 = \square$

$2 \times 10 = \square$



Ayuda al perro a llegar a su comida completando la serie del 2.




Tabla del 3

Colorea los círculos de los resultados de la tabla del 3.

Completa la tabla del 2.

$3 \times 1 = \square$

$3 \times 2 = \square$

$3 \times 3 = \square$

$3 \times 4 = \square$

$3 \times 5 = \square$

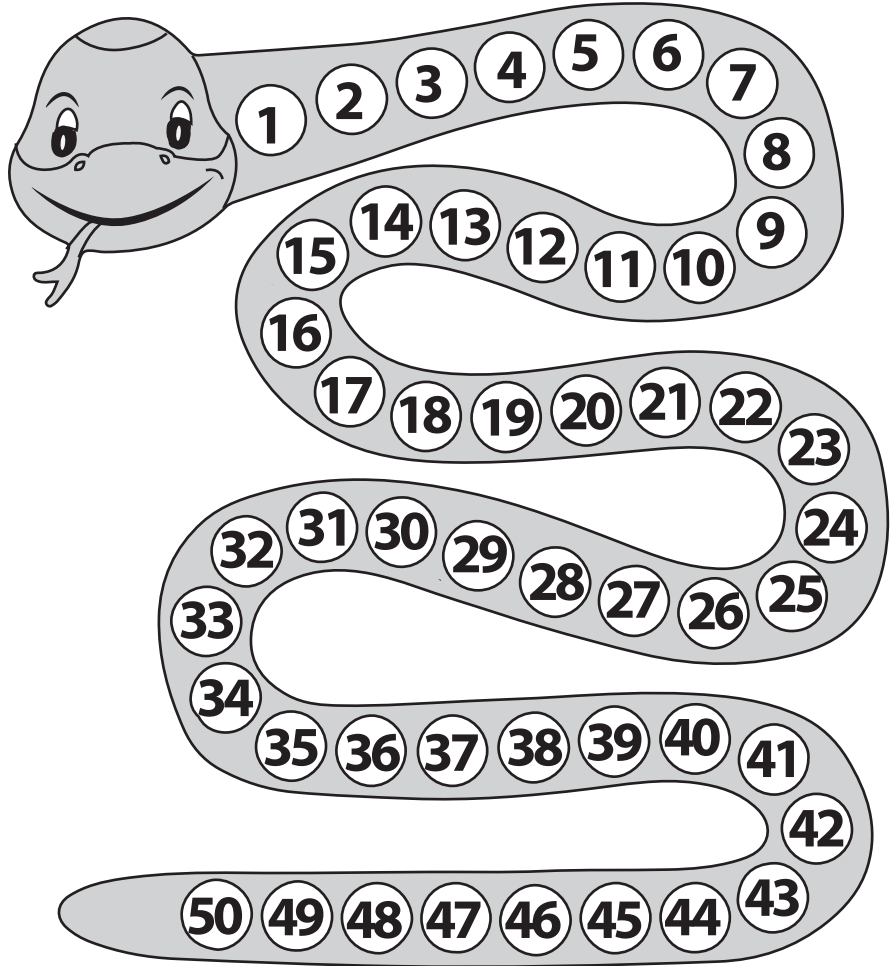
$3 \times 6 = \square$

$3 \times 7 = \square$


$3 \times 8 = \square$

$3 \times 9 = \square$

$3 \times 10 = \square$



©www.materialparamaestros.com



Ayuda al mono a llegar a su comida completando la serie del 3.




Tabla del 4

Colorea los bagones de los resultados de la tabla del 4.

Completa la tabla del 4.

$4 \times 1 = \square$

$4 \times 2 = \square$

$4 \times 3 = \square$

$4 \times 4 = \square$

$4 \times 5 = \square$


$4 \times 6 = \square$

$4 \times 7 = \square$

$4 \times 8 = \square$

$4 \times 9 = \square$

$4 \times 10 = \square$



Ayuda al oso a llegar a su comida completando la serie del 4.





Tabla del 5

Colorea los helados de los resultados de la tabla del 5.

Completa la tabla del 5.

- 5 x 1 =
- 5 x 2 =
- 5 x 3 =
- 5 x 4 =
- 5 x 5 =
- 5 x 6 =
- 5 x 7 =
- 5 x 8 =
- 5 x 9 =
- 5 x 10 =



Ayuda al caracol a llegar a la meta completando la serie del 5.




Tabla del 6

Completa la tabla del 6.

$6 \times 1 = \square$

$6 \times 2 = \square$

$6 \times 3 = \square$

$6 \times 4 = \square$

$6 \times 5 = \square$

$6 \times 6 = \square$

$6 \times 7 = \square$

$6 \times 8 = \square$


$6 \times 9 = \square$

$6 \times 10 = \square$

Colorea los cuadros según los resultados de la tabla del 6.

1	2	3	4	5	6	7	8	9	10
11	12	13	14	15	16	17	18	19	20
21	22	23	24	25	26	27	28	29	30
31	32	33	34	35	36	37	38	39	40
41	42	43	44	45	46	47	48	49	50
51	52	53	54	55	56	57	58	59	60
61	62	63	64	65	66	67	68	69	70
71	72	73	74	75	76	77	78	79	80
81	82	83	84	85	86	87	88	89	90
91	92	93	94	95	96	97	98	99	100

©www.materialparamaestros.com



Ayuda al ratón a llegar a su comida completando la serie del 6.





Tabla del 7

Completa la tabla del 7.

$7 \times 1 = \square$

$7 \times 2 = \square$

$7 \times 3 = \square$

$7 \times 4 = \square$

$7 \times 5 = \square$

$7 \times 6 = \square$

$7 \times 7 = \square$

$7 \times 8 = \square$


$7 \times 9 = \square$

$7 \times 10 = \square$

Colorea los cuadros según los resultados de la tabla del 7.

1	2	3	4	5	6	7	8	9	10
11	12	13	14	15	16	17	18	19	20
21	22	23	24	25	26	27	28	29	30
31	32	33	34	35	36	37	38	39	40
41	42	43	44	45	46	47	48	49	50
51	52	53	54	55	56	57	58	59	60
61	62	63	64	65	66	67	68	69	70
71	72	73	74	75	76	77	78	79	80
81	82	83	84	85	86	87	88	89	90
91	92	93	94	95	96	97	98	99	100

©www.materialparamaestros.com



Ayuda a la araña a llegar a su telaraña completando la serie del 7.





Tabla del 8

Completa la tabla del 8.

$8 \times 1 = \square$

$8 \times 2 = \square$

$8 \times 3 = \square$

$8 \times 4 = \square$

$8 \times 5 = \square$

$8 \times 6 = \square$

$8 \times 7 = \square$

$8 \times 8 = \square$

$8 \times 9 = \square$

$8 \times 10 = \square$

Colorea los cuadros según los resultados de la tabla del 8.

1	2	3	4	5	6	7	8	9	10
11	12	13	14	15	16	17	18	19	20
21	22	23	24	25	26	27	28	29	30
31	32	33	34	35	36	37	38	39	40
41	42	43	44	45	46	47	48	49	50
51	52	53	54	55	56	57	58	59	60
61	62	63	64	65	66	67	68	69	70
71	72	73	74	75	76	77	78	79	80
81	82	83	84	85	86	87	88	89	90
91	92	93	94	95	96	97	98	99	100

©www.materialparamaestros.com



Ayuda al pajarito a llegar a su nido completando la serie del 8.





Tabla del 9


Completa la tabla del 9.

- $8 \times 1 =$
- $8 \times 2 =$
- $8 \times 3 =$
- $8 \times 4 =$
- $8 \times 5 =$
- $8 \times 6 =$
- $8 \times 7 =$
- $8 \times 8 =$
- $8 \times 9 =$
- $8 \times 10 =$

Colorea los cuadros según los resultados de la tabla del 9.

1	2	3	4	5	6	7	8	9	10
11	12	13	14	15	16	17	18	19	20
21	22	23	24	25	26	27	28	29	30
31	32	33	34	35	36	37	38	39	40
41	42	43	44	45	46	47	48	49	50
51	52	53	54	55	56	57	58	59	60
61	62	63	64	65	66	67	68	69	70
71	72	73	74	75	76	77	78	79	80
81	82	83	84	85	86	87	88	89	90
91	92	93	94	95	96	97	98	99	100

©www.materialparamaestros.com



Ayuda a la abeja a llegar a su panal completando la serie del 9.

